



WINTER-18 EXAMINATION

Subject Name: Basic Mathematics

Model Answer

Subject Code:

22103

Q. No.	Sub Q.N.	Answers	Marking Scheme
1.	b)	$A = \frac{1}{2} \begin{vmatrix} x_1 & y_1 & 1 \\ x_2 & y_2 & 1 \\ x_3 & y_3 & 1 \end{vmatrix}$ $= \frac{1}{2} \begin{vmatrix} 4 & 3 & 1 \\ 1 & 4 & 1 \\ 2 & 3 & 1 \end{vmatrix}$ $= \frac{1}{2} [4(4-3) - 3(1-2) + 1(3-8)]$ $= 1$	1 1
	c)	Find the value of $\sin(15^\circ)$ using compound angles	02
	Ans	$\sin(15^\circ)$ $= \sin(45^\circ - 30^\circ)$ $= \sin 45^\circ \cos 30^\circ - \cos 45^\circ \sin 30^\circ$ $= \left(\frac{1}{\sqrt{2}}\right)\left(\frac{\sqrt{3}}{2}\right) - \left(\frac{1}{\sqrt{2}}\right)\left(\frac{1}{2}\right)$ $= \frac{\sqrt{3}-1}{2\sqrt{2}} \quad \text{or} \quad 0.2588$	½ ½ ½
		<p>OR</p> $\sin(15^\circ)$ $= \sin(60^\circ - 45^\circ)$ $= \sin 60^\circ \cos 45^\circ - \cos 60^\circ \sin 45^\circ$ $= \left(\frac{\sqrt{3}}{2}\right)\left(\frac{1}{\sqrt{2}}\right) - \left(\frac{1}{2}\right)\left(\frac{1}{\sqrt{2}}\right)$ $= \frac{\sqrt{3}-1}{2\sqrt{2}} \quad \text{or} \quad 0.2588$	½ ½ ½
d)	Find the area of rhombus whose diagonals are 6 cm and 9 cm.	02	
Ans	$\text{Area of rhombus} = \frac{1}{2}(d_1 \times d_2)$ $= \frac{1}{2}(6 \times 9)$	1	



WINTER – 18 EXAMINATION

Subject Name: Basic Mathematics

Model Answer

Subject Code:

22103

Q. No.	Sub Q.N.	Answers	Marking Scheme
1.	d)	Area of rhombus = 27	1
	e)	The length , breadth and height of a cuboid are 8 cm,11 cm and 15 cm respectively.Find the total surface area.	02
	Ans	Let $l = 8$, $b = 11$, $h = 15$ Total surface Area of a cuboid = $2[lb + bh + hl]$ $= 2[8 \times 11 + 11 \times 15 + 15 \times 8]$ $= 746$	1 1
	f)	Find the range of the data: 14 , 18 , 22 , 35 , 42 , 44 , 8 , 7 , 5 and 2	02
Ans	Range = $L - S$ $= 44 - 2$ $= 42$	1 1	
	g)	If mean is 34.5 and standard deviation is 5 find the coefficient of variance.	02
Ans	Coefficient of variance = $\frac{\sigma}{x} \times 100$ $= \frac{5}{34.5} \times 100$ $= 14.493$	1 1	
2.		Attempt any three of the following:	12
	a)	If $A = \begin{bmatrix} 0 & 1 & -1 \\ 4 & -3 & 4 \\ 3 & -3 & 4 \end{bmatrix}$ prove that $A^2 = I$	04
Ans		$A = \begin{bmatrix} 0 & 1 & -1 \\ 4 & -3 & 4 \\ 3 & -3 & 4 \end{bmatrix}$	



WINTER – 18 EXAMINATION

Subject Name: Basic Mathematics

Model Answer

Subject Code:

22103

Q. No.	Sub Q. N.	Answers	Marking Scheme
2.	a)	$A^2 = AA$ $= \begin{bmatrix} 0 & 1 & -1 \\ 4 & -3 & 4 \\ 3 & -3 & 4 \end{bmatrix} \begin{bmatrix} 0 & 1 & -1 \\ 4 & -3 & 4 \\ 3 & -3 & 4 \end{bmatrix}$ $= \begin{bmatrix} 0+4-3 & 0-3+3 & 0+4-4 \\ 0-12+12 & 4+9-12 & -4-12+16 \\ 0-12+12 & 3+9-12 & -3-12+16 \end{bmatrix}$ $= \begin{bmatrix} 1 & 0 & 0 \\ 0 & 1 & 0 \\ 0 & 0 & 1 \end{bmatrix}$ $= I$ $\therefore A^2 = I$	2 2
	b)	<p>Resolve into partial fractions: $\frac{x^2 + 23x}{(x+3)(x^2+1)}$</p> $\frac{x^2 + 23x}{(x+3)(x^2+1)} = \frac{A}{x+3} + \frac{Bx+C}{x^2+1}$ $\therefore x^2 + 23x = (x^2+1)A + (x+3)(Bx+C)$ <p>Put $x = -3$</p> $\therefore (-3)^2 + 23(-3) = ((-3)^2 + 1)A$ $\therefore -60 = 10A$ $\therefore A = -6$ <p>Put $x = 0$</p> $\therefore 0 = (1)A + (3)(0+C)$ $\therefore 0 = -6 + 3C$ $\therefore C = 2$ <p>Put $x = 1$</p> $\therefore 24 = 2(-6) + 4B + 4(2)$ $\therefore B = 7$ $\therefore \frac{x^2 + 23x}{(x+3)(x^2+1)} = \frac{-6}{x+3} + \frac{7x+2}{x^2+1}$	04 1/2



WINTER – 18 EXAMINATION

Subject Name: Basic Mathematics

Model Answer

Subject Code:

22103

Q. No.	Sub Q.N.	Answers	Marking Scheme
2.	c)	<p>Solve the following equations by Cramer's rule:</p> $x + y + z = 2$ $y + z = 1$ $x + z = 3$ <p>Ans</p> $D = \begin{vmatrix} 1 & 1 & 1 \\ 0 & 1 & 1 \\ 1 & 0 & 1 \end{vmatrix}$ $= 1(1-0) - 1(0-1) + 1(0-1) = 1$ $D_x = \begin{vmatrix} 2 & 1 & 1 \\ 1 & 1 & 1 \\ 3 & 0 & 1 \end{vmatrix}$ $= 2(1-0) - 1(1-3) + 1(0-3) = 1$ $\therefore x = \frac{D_x}{D} = \frac{1}{1} = 1$ $D_y = \begin{vmatrix} 1 & 2 & 1 \\ 0 & 1 & 1 \\ 1 & 3 & 1 \end{vmatrix}$ $= 1(1-3) - 2(0-1) + 1(0-1) = -1$ $\therefore y = \frac{D_y}{D} = \frac{-1}{1} = -1$ $D_z = \begin{vmatrix} 1 & 1 & 2 \\ 0 & 1 & 1 \\ 1 & 0 & 3 \end{vmatrix}$ $= 1(3-0) - 1(0-1) + 2(0-1) = 2$ $\therefore z = \frac{D_z}{D} = \frac{2}{1} = 2$ <p>-----</p>	<p>04</p> <p>1</p> <p>1</p> <p>1</p>



WINTER – 18 EXAMINATION

Subject Name: Basic Mathematics

Model Answer

Subject Code: **22103**

Q. No.	Sub Q.N.	Answers	Marking Scheme
3.	b)	<p>Prove : $\tan\left(\frac{\pi}{4} + A\right) = \frac{\cos A + \sin A}{\cos A - \sin A}$</p> <p>Ans $\tan\left(\frac{\pi}{4} + A\right)$</p> $= \frac{\tan \frac{\pi}{4} + \tan A}{1 - \tan \frac{\pi}{4} \tan A}$ $= \frac{1 + \tan A}{1 - \tan A}$ $= \frac{1 + \frac{\sin A}{\cos A}}{1 - \frac{\sin A}{\cos A}}$ $= \frac{\cos A + \sin A}{\cos A - \sin A}$ <p>OR</p> $\frac{\cos A + \sin A}{\cos A - \sin A}$ $= \frac{1 + \frac{\sin A}{\cos A}}{1 - \frac{\sin A}{\cos A}}$ $= \frac{1 + \tan A}{1 - \tan A}$ $= \frac{\tan \frac{\pi}{4} + \tan A}{1 - \tan \frac{\pi}{4} \tan A}$ $= \tan\left(\frac{\pi}{4} + A\right)$	<p>04</p> <p>1</p> <p>1</p> <p>1</p> <p>1</p> <p>1</p> <p>1</p> <p>1</p> <p>1</p>
	c)	<p>Prove: $\frac{\sin 4A + \sin 5A + \sin 6A}{\cos 4A + \cos 5A + \cos 6A} = \tan 5A$</p>	04



WINTER – 18 EXAMINATION

Subject Name: Basic Mathematics

Model Answer

Subject Code:

22103

Q. No.	Sub Q.N.	Answers	Marking Scheme
3.	c)	$\frac{\sin 4A + \sin 5A + \sin 6A}{\cos 4A + \cos 5A + \cos 6A}$ $= \frac{(\sin 4A + \sin 6A) + \sin 5A}{(\cos 4A + \cos 6A) + \cos 5A}$ $= \frac{2 \sin \left(\frac{4A + 6A}{2} \right) \cos \left(\frac{4A - 6A}{2} \right) + \sin 5A}{2 \cos \left(\frac{4A + 6A}{2} \right) \cos \left(\frac{4A - 6A}{2} \right) + \cos 5A}$ $= \frac{2 \sin 5A \cos(-A) + \sin 5A}{2 \cos 5A \cos(-A) + \cos 5A}$ $= \frac{\sin 5A [2 \cos(-A) + 1]}{\cos 5A [2 \cos(-A) + 1]}$ $= \tan 5A$	2 1 ½ ½
	d)	<p>Prove : $\cos^{-1} \left(\frac{4}{5} \right) + \cos^{-1} \left(\frac{12}{13} \right) = \cos^{-1} \left(\frac{33}{65} \right)$</p>	04
	Ans	<p>Let $\cos^{-1} \left(\frac{4}{5} \right) = A$</p> <p>$\therefore \cos A = \frac{4}{5}$</p> <p>$\therefore \sin^2 A = 1 - \cos^2 A$</p> $= 1 - \frac{16}{25}$ $= \frac{9}{25}$ <p>$\therefore \sin A = \frac{3}{5}$</p> <p>$\cos^{-1} \left(\frac{12}{13} \right) = B$</p> <p>$\therefore \cos B = \frac{12}{13}$</p> <p>$\therefore \sin^2 B = 1 - \cos^2 B$</p> $\therefore \sin^2 B = 1 - \frac{144}{169}$	1



WINTER – 18 EXAMINATION

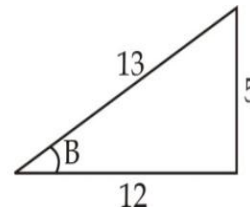
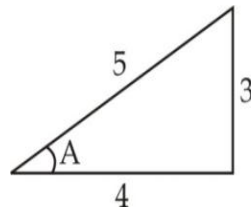
Subject Name: Basic Mathematics

Model Answer

Subject Code:

22103

Q. No.	Sub Q.N.	Answers	Marking Scheme
3.	d)	$\therefore \sin^2 B = \frac{25}{169}$ $\therefore \sin B = \frac{5}{13}$ $\therefore \cos(A+B) = \cos A \cos B - \sin A \sin B$ $= \left(\frac{4}{5}\right)\left(\frac{12}{13}\right) - \left(\frac{3}{5}\right)\left(\frac{5}{13}\right)$ $= \frac{48}{65} - \frac{15}{65}$ $\therefore \cos(A+B) = \frac{33}{65}$ $\therefore A+B = \cos^{-1}\left(\frac{33}{65}\right)$ $\therefore \cos^{-1}\left(\frac{4}{5}\right) + \cos^{-1}\left(\frac{12}{13}\right) = \cos^{-1}\left(\frac{33}{65}\right)$ <p>OR</p> <p>Let $\cos^{-1}\left(\frac{4}{5}\right) = A$</p> $\therefore \cos A = \frac{4}{5}$ $\therefore \tan A = \frac{3}{4}$ $A = \tan^{-1}\left(\frac{3}{4}\right)$ $\therefore \cos^{-1}\left(\frac{4}{5}\right) = \tan^{-1}\left(\frac{3}{4}\right)$ $\cos^{-1}\left(\frac{12}{13}\right) = B$ $\therefore \cos B = \frac{12}{13}$ $\therefore \tan B = \frac{5}{12}$	<p>1</p> <p>1</p> <p>½</p> <p>½</p> <p>1</p>





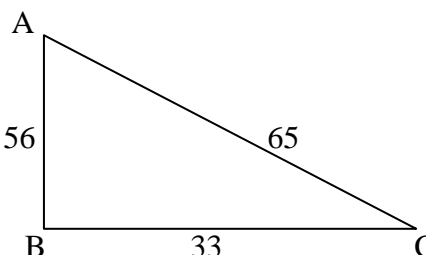
WINTER – 18 EXAMINATION

Subject Name: Basic Mathematics

Model Answer

Subject Code:

22103

Q. No.	Sub Q.N.	Answers	Marking Scheme
3.	d)	$B = \tan^{-1}\left(\frac{5}{12}\right)$ $\therefore \cos^{-1}\left(\frac{12}{13}\right) = \tan^{-1}\left(\frac{5}{12}\right)$ $L.H.S. = \tan^{-1}\left(\frac{3}{4}\right) + \tan^{-1}\left(\frac{5}{12}\right)$ $= \tan^{-1}\left(\frac{\frac{3}{4} + \frac{5}{12}}{1 - \left(\frac{3}{4}\right)\left(\frac{5}{12}\right)}\right)$ $= \tan^{-1}\left(\frac{56}{33}\right)$ <p>Let $\tan^{-1}\left(\frac{56}{33}\right) = C$</p> $\therefore \tan C = \frac{56}{33}$ $\therefore \cos C = \frac{33}{65}$ $\therefore C = \cos^{-1}\left(\frac{33}{65}\right)$ $\therefore \cos^{-1}\left(\frac{4}{5}\right) + \cos^{-1}\left(\frac{12}{13}\right) = \cos^{-1}\left(\frac{33}{65}\right)$	<p>1</p> <p>½</p> <p>½</p> <p>1</p>
			
4.	a)	<p>Attempt any three of the following:</p> <p>If $A = \begin{bmatrix} 2 & 4 & 4 \\ 4 & 2 & 4 \\ 4 & 4 & 2 \end{bmatrix}$ show that $A^2 - 8A$ is scalar matrix.</p>	12
	Ans	$A^2 - 8A$ $= A.A - 8A$	04



WINTER – 18 EXAMINATION

Subject Name: Basic Mathematics

Model Answer

Subject Code:

22103

Q. No.	Sub Q.N.	Answers	Marking Scheme
4.	b)	$\therefore \frac{3x-1}{(x-4)(x+1)(x-1)} = \frac{11}{x-4} + \frac{-2}{x+1} + \frac{-1}{x-1}$	1/2
	c)	<p>Prove that $\cos 20^\circ \cdot \cos 40^\circ \cdot \cos 60^\circ \cdot \cos 80^\circ = \frac{1}{16}$</p>	04
	Ans	$\begin{aligned} \cos 20^\circ \cos 40^\circ \cos 60^\circ \cos 80^\circ &= \frac{1}{2} (2 \cos 20^\circ \cos 40^\circ) \cdot \left(\frac{1}{2}\right) \cos 80^\circ \\ &= \frac{1}{4} [\cos(20^\circ + 40^\circ) + \cos(20^\circ - 40^\circ)] \cos 80^\circ \\ &= \frac{1}{4} [\cos(60^\circ) + \cos(-20^\circ)] \cos 80^\circ \\ &= \frac{1}{4} \left[\frac{1}{2} \cos 80^\circ + \cos 20^\circ \cos 80^\circ \right] \\ &= \frac{1}{4} \left[\frac{1}{2} \cos 80^\circ + \frac{1}{2} (2 \cos 20^\circ \cos 80^\circ) \right] \\ &= \frac{1}{8} [\cos 80^\circ + \cos(20^\circ + 80^\circ) + \cos(20^\circ - 80^\circ)] \\ &= \frac{1}{8} [\cos 80^\circ + \cos(100^\circ) + \cos(-60^\circ)] \\ &= \frac{1}{8} \left[\cos 80^\circ + \cos(180 - 80^\circ) + \frac{1}{2} \right] \\ &= \frac{1}{8} \left[\cos 80^\circ - \cos(80^\circ) + \frac{1}{2} \right] \\ &= \frac{1}{16} \end{aligned}$	1/2 1/2 1/2 1/2 1/2 1/2 1/2
d)	<p>Prove: $\sin A \cdot \sin(60 - A) \cdot \sin(60 + A) = \frac{1}{4} \sin 3A$.</p>	04	
Ans	$\begin{aligned} L.H.S. &= \sin A \cdot \sin(60 - A) \cdot \sin(60 + A) \\ &= \sin A (\sin 60 \cos A - \cos 60 \sin A) (\sin 60 \cos A + \cos 60 \sin A) \\ &= \sin A \left[\frac{\sqrt{3}}{2} \cos A - \frac{1}{2} \sin A \right] \left[\frac{\sqrt{3}}{2} \cos A + \frac{1}{2} \sin A \right] \end{aligned}$	1/2 1	



WINTER – 18 EXAMINATION

Subject Name: Basic Mathematics

Model Answer

Subject Code: 22103

Q. No.	Sub Q.N.	Answers	Marking Scheme
4.	d)	$L.H.S. = \sin A \left[\left(\frac{\sqrt{3}}{2} \cos A \right)^2 - \left(\frac{1}{2} \sin A \right)^2 \right]$ $= \sin A \left[\frac{3}{4} \cos^2 A - \frac{1}{4} \sin^2 A \right]$ $= \frac{1}{4} \sin A [3 \cos^2 A - \sin^2 A]$ $= \frac{1}{4} \sin A [3 (1 - \sin^2 A) - \sin^2 A]$ $= \frac{1}{4} \sin A [3 - 3 \sin^2 A - \sin^2 A]$ $= \frac{1}{4} [3 \sin A - 3 \sin^3 A - \sin^3 A]$ $= \frac{1}{4} [3 \sin A - 4 \sin^3 A]$ $= \frac{1}{4} \sin 3 A = R.H.S.$	<p>1/2</p> <p>1/2</p> <p>1/2</p> <p>1/2</p> <p>1/2</p>
	e)	<p>Prove : $\tan^{-1}\left(\frac{1}{7}\right) + \tan^{-1}\left(\frac{1}{13}\right) = \cos^{-1}\left(\frac{9}{2}\right)$</p>	04
	Ans	$L.H.S. = \tan^{-1}\left(\frac{1}{7}\right) + \tan^{-1}\left(\frac{1}{13}\right)$ $= \tan^{-1} \left[\frac{\frac{1}{7} + \frac{1}{13}}{1 - \left(\frac{1}{7}\right)\left(\frac{1}{13}\right)} \right]$ $= \tan^{-1} \left(\frac{2}{9} \right)$ $R.H.S. = \cot^{-1} \left(\frac{9}{2} \right)$ $\cot^{-1} \left(\frac{9}{2} \right) \neq \cos^{-1} \left(\frac{9}{2} \right)$ <p>$\therefore L.H.S. \neq R.H.S.$</p>	<p>2</p> <p>1 1/2</p> <p>1/2</p>
		<p>Note: "If Students attempted to solve the question Give appropriate marks."</p>	



WINTER – 18 EXAMINATION

Subject Name: Basic Mathematics

Model Answer

Subject Code:

22103

Q. No.	Sub Q.N.	Answers	Marking Scheme
5.	a)(ii)	$\therefore \frac{y-5}{8} = \frac{x-2}{-1}$ $\therefore -y+5 = 8x-16$ $\therefore 8x+y-21=0$ <p>-----</p>	1
	b)	Attempt the following:	06
	(i)	Find the acute angle between the lines $3x+2y+4=0$ and $2x-3y-7=0$.	03
	Ans	For $3x+2y+4=0$, slope $m_1 = \frac{-a}{b} = \frac{-3}{2}$	1/2
		For $2x-3y-7=0$, slope $m_2 = \frac{-a}{b} = \frac{-2}{-3} = \frac{2}{3}$	1/2
		$\therefore \tan \theta = \left \frac{m_1 - m_2}{1 + m_1 m_2} \right $ $= \left \frac{\frac{-3}{2} - \frac{2}{3}}{1 + \left(\frac{-3}{2}\right)\left(\frac{2}{3}\right)} \right $	1
		$\therefore \tan \theta = \infty$	1/2
		$\therefore \theta = \tan^{-1}(\infty)$	
		$\therefore \theta = 90^\circ \quad \text{or} \quad \frac{\pi}{2}$	1/2
		OR	
		Consider $m_1 m_2 = \left(\frac{-3}{2}\right)\left(\frac{2}{3}\right)$ $= -1$	1
		$\therefore m_1 m_2 = -1$	1
		$\therefore \text{Lines are perpendicular}$	
		$\therefore \theta = 90^\circ \quad \text{or} \quad \frac{\pi}{2}$	1



WINTER – 18 EXAMINATION

Subject Name: Basic Mathematics

Model Answer

Subject Code: 22103

Q. No.	Sub Q.N.	Answers	Marking Scheme
5.	b)(ii)	Find the distance between lines $3x + 2y = 5$ and $6x + 4y = 6$	03
	Ans	$L_1 : 3x + 2y - 5 = 0$ and $L_2 : 6x + 4y - 6 = 0$ $\therefore L_1 : 6x + 4y - 10 = 0$ and $L_2 : 6x + 4y - 6 = 0$ $\therefore a = 6$, $b = 4$, $c_1 = -10$ and $c_2 = -6$ $d = \frac{ c_2 - c_1 }{\sqrt{a^2 + b^2}}$ $= \frac{ -6 + 10 }{\sqrt{6^2 + 4^2}}$ $= \frac{4}{\sqrt{52}}$ $= 0.555 \quad \text{or} \quad \frac{2}{\sqrt{13}}$	2 1
	c)	Attempt the following:	06
	(i)	A square grassy plot is of side 100 metre. It has a gravel path 10 metres wide all round it on the inside. Find the area of path.	03
	Ans	Area of path = Area of grassy plot – Area of inner square of grassy plot $= (100)^2 - (80)^2$ $= 3600$	2 1
6.	c)(ii)	The volume of cube is 1000 cm^3 . Find its total surface area.	03
	Ans	Let side of cube = l \therefore volume of cube = $l^3 = 1000$ $\therefore l = 10$ Total surface area of cube = $6l^2$ $= 6(10)^2$ $= 600$	1 1 1
		Attempt any two of the following:	12
	a)	Find mean, standard deviation and coefficient of variance of the following data:	



WINTER – 18 EXAMINATION

Subject Name: Basic Mathematics

Model Answer

Subject Code: 22103

Q. No.	Sub Q.N.	Answers	Marking Scheme																																																						
6.	a)	<table border="1"> <thead> <tr> <th>Class-Interval</th> <th>0-10</th> <th>10-20</th> <th>20-30</th> <th>30-40</th> <th>40-50</th> </tr> </thead> <tbody> <tr> <td>Frequency</td> <td>3</td> <td>5</td> <td>8</td> <td>3</td> <td>1</td> </tr> </tbody> </table>	Class-Interval	0-10	10-20	20-30	30-40	40-50	Frequency	3	5	8	3	1	06																																										
		Class-Interval	0-10	10-20	20-30	30-40	40-50																																																		
Frequency	3	5	8	3	1																																																				
<p>Ans</p> <table border="1"> <thead> <tr> <th>Class Interval</th> <th>x_i</th> <th>f_i</th> <th>$f_i x_i$</th> <th>$d_i = \frac{x_i - a}{h}$</th> <th>$f_i d_i$</th> <th>d_i^2</th> <th>$f_i d_i^2$</th> </tr> </thead> <tbody> <tr> <td>0-10</td> <td>5</td> <td>3</td> <td>15</td> <td>-2</td> <td>-6</td> <td>4</td> <td>12</td> </tr> <tr> <td>10-20</td> <td>15</td> <td>5</td> <td>75</td> <td>-1</td> <td>-5</td> <td>1</td> <td>5</td> </tr> <tr> <td>20-30</td> <td>25</td> <td>8</td> <td>200</td> <td>0</td> <td>0</td> <td>0</td> <td>0</td> </tr> <tr> <td>30-40</td> <td>35</td> <td>3</td> <td>105</td> <td>1</td> <td>3</td> <td>1</td> <td>3</td> </tr> <tr> <td>40-50</td> <td>45</td> <td>1</td> <td>45</td> <td>2</td> <td>2</td> <td>4</td> <td>4</td> </tr> <tr> <td></td> <td></td> <td>20</td> <td>440</td> <td></td> <td>-6</td> <td></td> <td>24</td> </tr> </tbody> </table> <p>Mean $\bar{x} = \frac{\sum f_i x_i}{N}$</p> <p>$\therefore \bar{x} = \frac{440}{20}$</p> <p>$\therefore \bar{x} = 22$</p> <p>S.D. $= \sigma = \sqrt{\frac{\sum f_i d_i^2}{N} - \left(\frac{\sum f_i d_i}{N}\right)^2} \times h$</p> <p>$= \sqrt{\frac{24}{20} - \left(\frac{-6}{20}\right)^2} \times 10$</p> <p>$= 10.54$</p> <p>Coefficient of variance $= \frac{\sigma}{\bar{x}} \times 100$</p> <p>$= \frac{10.54}{22} \times 100$</p> <p>$= 47.91$</p>	Class Interval	x_i	f_i	$f_i x_i$	$d_i = \frac{x_i - a}{h}$	$f_i d_i$	d_i^2	$f_i d_i^2$	0-10	5	3	15	-2	-6	4	12	10-20	15	5	75	-1	-5	1	5	20-30	25	8	200	0	0	0	0	30-40	35	3	105	1	3	1	3	40-50	45	1	45	2	2	4	4			20	440		-6		24	3
Class Interval	x_i	f_i	$f_i x_i$	$d_i = \frac{x_i - a}{h}$	$f_i d_i$	d_i^2	$f_i d_i^2$																																																		
0-10	5	3	15	-2	-6	4	12																																																		
10-20	15	5	75	-1	-5	1	5																																																		
20-30	25	8	200	0	0	0	0																																																		
30-40	35	3	105	1	3	1	3																																																		
40-50	45	1	45	2	2	4	4																																																		
		20	440		-6		24																																																		
			1																																																						
			1																																																						



WINTER – 18 EXAMINATION

Subject Name: Basic Mathematics

Model Answer

Subject Code:

22103

Q. No.	Sub Q. N.	Answers	Marking Scheme																																										
6.	a)	<p>OR</p> <table border="1" style="margin-left: auto; margin-right: auto;"> <thead> <tr> <th>Class Interval</th> <th>x_i</th> <th>f_i</th> <th>$f_i x_i$</th> <th>x_i^2</th> <th>$f_i x_i^2$</th> </tr> </thead> <tbody> <tr> <td>0-10</td> <td>5</td> <td>3</td> <td>15</td> <td>25</td> <td>75</td> </tr> <tr> <td>10-20</td> <td>15</td> <td>5</td> <td>75</td> <td>225</td> <td>1125</td> </tr> <tr> <td>20-30</td> <td>25</td> <td>8</td> <td>200</td> <td>625</td> <td>5000</td> </tr> <tr> <td>30-40</td> <td>35</td> <td>3</td> <td>105</td> <td>1225</td> <td>3675</td> </tr> <tr> <td>40-50</td> <td>45</td> <td>1</td> <td>45</td> <td>2025</td> <td>2025</td> </tr> <tr> <td></td> <td></td> <td>20</td> <td>440</td> <td></td> <td>11900</td> </tr> </tbody> </table> <p>Mean $\bar{x} = \frac{\sum f_i x_i}{N}$ $\therefore \bar{x} = \frac{440}{20}$ $\therefore \bar{x} = 22$</p> <p>S.D. $\sigma = \sqrt{\frac{\sum f_i x_i^2}{N} - (\bar{x})^2}$ $= \sqrt{\frac{11900}{20} - (22)^2}$ $\sigma = 10.54$</p> <p>Coefficient of variance $= \frac{\sigma}{\bar{x}} \times 100$ $= \frac{10.54}{22} \times 100$ $= 47.91$</p> <hr style="border-top: 1px dashed black;"/>	Class Interval	x_i	f_i	$f_i x_i$	x_i^2	$f_i x_i^2$	0-10	5	3	15	25	75	10-20	15	5	75	225	1125	20-30	25	8	200	625	5000	30-40	35	3	105	1225	3675	40-50	45	1	45	2025	2025			20	440		11900	<p>3</p> <p>1</p> <p>1</p> <p>1</p>
Class Interval	x_i	f_i	$f_i x_i$	x_i^2	$f_i x_i^2$																																								
0-10	5	3	15	25	75																																								
10-20	15	5	75	225	1125																																								
20-30	25	8	200	625	5000																																								
30-40	35	3	105	1225	3675																																								
40-50	45	1	45	2025	2025																																								
		20	440		11900																																								



WINTER – 18 EXAMINATION

Subject Name: Basic Mathematics

Model Answer

Subject Code:

22103

Q. No.	Sub Q. N.	Answers	Marking Scheme																																
6.	b)	Attempt the following:	06																																
	(i)	Find mean for the following data:	03																																
		<table border="1"> <thead> <tr> <th>Class-Interval</th> <th>10-20</th> <th>20-30</th> <th>30-40</th> <th>40-50</th> <th>50-60</th> <th>60-70</th> </tr> </thead> <tbody> <tr> <td>Frequency</td> <td>4</td> <td>6</td> <td>10</td> <td>18</td> <td>9</td> <td>3</td> </tr> </tbody> </table>	Class-Interval	10-20	20-30	30-40	40-50	50-60	60-70	Frequency	4	6	10	18	9	3																			
Class-Interval	10-20	20-30	30-40	40-50	50-60	60-70																													
Frequency	4	6	10	18	9	3																													
	Ans	<table border="1"> <thead> <tr> <th>Class</th> <th>x_i</th> <th>f_i</th> <th>$f_i x_i$</th> </tr> </thead> <tbody> <tr> <td>10-20</td> <td>15</td> <td>4</td> <td>60</td> </tr> <tr> <td>20-30</td> <td>25</td> <td>6</td> <td>150</td> </tr> <tr> <td>30-40</td> <td>35</td> <td>10</td> <td>350</td> </tr> <tr> <td>40-50</td> <td>45</td> <td>18</td> <td>810</td> </tr> <tr> <td>50-60</td> <td>55</td> <td>9</td> <td>495</td> </tr> <tr> <td>60-70</td> <td>65</td> <td>3</td> <td>195</td> </tr> <tr> <td></td> <td></td> <td>50</td> <td>2060</td> </tr> </tbody> </table>	Class	x_i	f_i	$f_i x_i$	10-20	15	4	60	20-30	25	6	150	30-40	35	10	350	40-50	45	18	810	50-60	55	9	495	60-70	65	3	195			50	2060	2
Class	x_i	f_i	$f_i x_i$																																
10-20	15	4	60																																
20-30	25	6	150																																
30-40	35	10	350																																
40-50	45	18	810																																
50-60	55	9	495																																
60-70	65	3	195																																
		50	2060																																
		<p>Mean $\bar{x} = \frac{\sum f_i x_i}{N}$</p> <p>$\therefore \bar{x} = \frac{2060}{50}$</p> <p>$\therefore \bar{x} = 41.2$</p>	½																																
		<p>-----</p>	½																																
	b)(ii)	<p>The two sets of observation are given below:</p> <table border="1"> <thead> <tr> <th>Set-I</th> <th>Set-II</th> </tr> </thead> <tbody> <tr> <td>$\bar{x} = 82.5$</td> <td>$\bar{x} = 48.75$</td> </tr> <tr> <td>$\sigma = 7.3$</td> <td>$\sigma = 8.35$</td> </tr> </tbody> </table> <p>Which of the two sets is more consistent?</p>	Set-I	Set-II	$\bar{x} = 82.5$	$\bar{x} = 48.75$	$\sigma = 7.3$	$\sigma = 8.35$	03																										
Set-I	Set-II																																		
$\bar{x} = 82.5$	$\bar{x} = 48.75$																																		
$\sigma = 7.3$	$\sigma = 8.35$																																		



WINTER – 18 EXAMINATION

Subject Name: Basic Mathematics

Model Answer

Subject Code:

22103

Q. No.	Sub Q. N.	Answers	Marking Scheme
6.	b)(ii)	<p>Coefficient of variance $V = \frac{\sigma}{x} \times 100$</p> <p>For set-I</p> $V_1 = \frac{7.3}{82.5} \times 100$ $\therefore V_1 = 8.848$ <p>For set-II</p> $V_2 = \frac{8.35}{48.75} \times 100$ $\therefore V_2 = 17.128$ $\therefore V_1 < V_2$ $\therefore \text{Set-I is more consistent.}$	<p>1</p> <p>1</p> <p>1</p>
	c)	<p>Solve the following equations by matrix inversion method :</p> $x + 3y + 2z = 6, 3x - 2y + 5z = 5, 2x - 3y + 6z = 7.$	06
	Ans	<p>Let $A = \begin{bmatrix} 1 & 3 & 2 \\ 3 & -2 & 5 \\ 2 & -3 & 6 \end{bmatrix}$, $B = \begin{bmatrix} 6 \\ 5 \\ 7 \end{bmatrix}$, $X = \begin{bmatrix} x \\ y \\ z \end{bmatrix}$</p> $ A = \begin{vmatrix} 1 & 3 & 2 \\ 3 & -2 & 5 \\ 2 & -3 & 6 \end{vmatrix}$ $ A = 1(-12 + 15) - 3(18 - 10) + 2(-9 + 4)$ $ A = -31$ $\therefore A \neq 0$ $\therefore A^{-1} \text{ exists}$	1



WINTER – 18 EXAMINATION

Subject Name: Basic Mathematics

Model Answer

Subject Code:

22103

Q. No.	Sub Q. N.	Answers	Marking Scheme
6.	c)	$\text{Matrix of minors} = \begin{bmatrix} \begin{vmatrix} -2 & 5 \\ -3 & 6 \end{vmatrix} & \begin{vmatrix} 3 & 5 \\ 2 & 6 \end{vmatrix} & \begin{vmatrix} 3 & -2 \\ 2 & -3 \end{vmatrix} \\ \begin{vmatrix} 3 & 2 \\ -3 & 6 \end{vmatrix} & \begin{vmatrix} 1 & 2 \\ 2 & 6 \end{vmatrix} & \begin{vmatrix} 1 & 3 \\ 2 & -3 \end{vmatrix} \\ \begin{vmatrix} 3 & 2 \\ -2 & 5 \end{vmatrix} & \begin{vmatrix} 1 & 2 \\ 3 & 5 \end{vmatrix} & \begin{vmatrix} 1 & 3 \\ 3 & -2 \end{vmatrix} \end{bmatrix}$ $= \begin{bmatrix} 3 & 8 & -5 \\ 24 & 2 & -9 \\ 19 & -1 & -11 \end{bmatrix}$ $\text{Matrix of cofactors} = \begin{bmatrix} 3 & -8 & -5 \\ -24 & 2 & 9 \\ 19 & 1 & -11 \end{bmatrix}$ <p style="text-align: center;"><i>OR</i></p> $C_{11} = + \begin{vmatrix} -2 & 5 \\ -3 & 6 \end{vmatrix} = 3, \quad C_{12} = - \begin{vmatrix} 3 & 5 \\ 2 & 6 \end{vmatrix} = -8, \quad C_{13} = + \begin{vmatrix} 3 & -2 \\ 2 & -3 \end{vmatrix} = -5$ $C_{21} = - \begin{vmatrix} 3 & 2 \\ -3 & 6 \end{vmatrix} = -24, \quad C_{22} = + \begin{vmatrix} 1 & 2 \\ 2 & 6 \end{vmatrix} = 2, \quad C_{23} = - \begin{vmatrix} 1 & 3 \\ 2 & -3 \end{vmatrix} = 9$ $C_{31} = + \begin{vmatrix} 3 & 2 \\ -2 & 5 \end{vmatrix} = 19, \quad C_{32} = - \begin{vmatrix} 1 & 2 \\ 3 & 5 \end{vmatrix} = 1, \quad C_{33} = + \begin{vmatrix} 1 & 3 \\ 3 & -2 \end{vmatrix} = -11$ $\text{Matrix of cofactors} = \begin{bmatrix} 3 & -8 & -5 \\ -24 & 2 & 9 \\ 19 & 1 & -11 \end{bmatrix}$ $\text{Adj.}A = \begin{bmatrix} 3 & -24 & 19 \\ -8 & 2 & 1 \\ -5 & 9 & -11 \end{bmatrix}$ $A^{-1} = \frac{1}{ A } \text{Adj.}A$ $= \frac{1}{-31} \begin{bmatrix} 3 & -24 & 19 \\ -8 & 2 & 1 \\ -5 & 9 & -11 \end{bmatrix}$	1 1 2 ½ ½

